




Name Date



Are the days getting longer or shorter?

1. During spring or autumn choose a day of the week.

Circle the day you choose:

Monday

Tuesday

Wednesday

Thursday

Friday

Saturday

Sunday

2. Each week on that day draw one clock that shows the time of sunrise and one that shows the time of sunset.



Sunrise 7.00 am



Sunset 5.30 pm

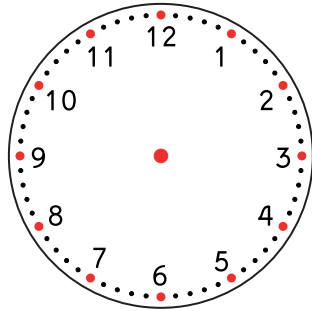
(If you don't know what time the Sun rose, ask an adult to help you find out online.)



Name

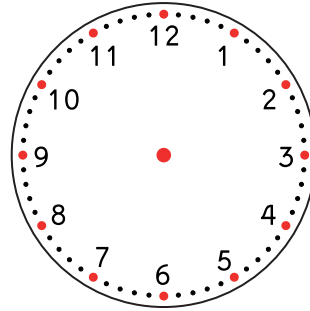
Date

Date.....



Sunrise time

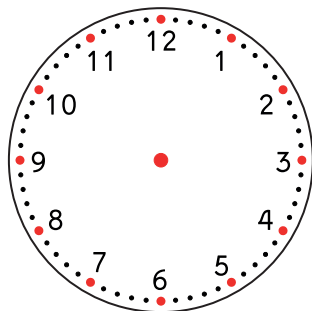
..... am



Sunset time

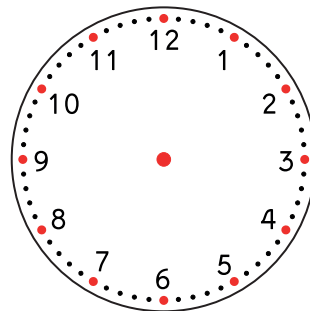
..... pm

Date.....



Sunrise time

..... am



Sunset time

..... pm

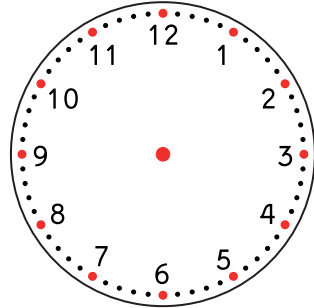
How much longer or shorter is daytime after one week?



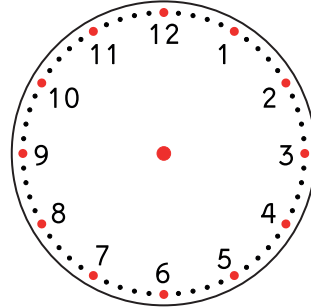
Name

Date

Date.....



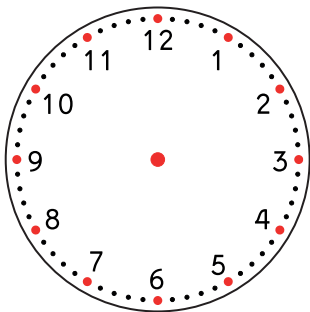
Sunrise time
..... am



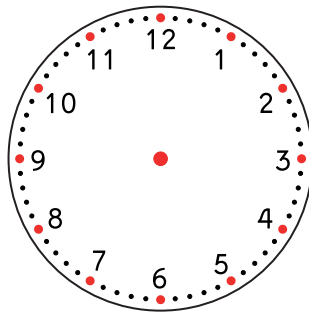
Sunset time
..... pm

Date.....

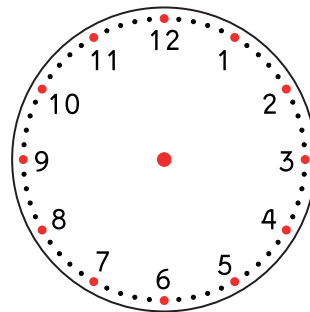
Date.....



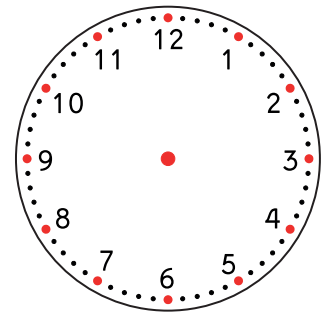
Sunrise time
..... am



Sunset time
..... pm



Sunrise time
..... am



Sunset time
..... pm

How much longer or shorter is daytime after four weeks?

Is daytime getting longer or shorter?